





















Naam: _____






Hoeveel is het plaatje waard?

									
5	10	4	6	2	9	8	3	15	7






Reken de som uit






	+		-		+		+		=
---	---	---	---	---	---	--	---	---	---






	-		+		-		+		=
--	---	--	---	--	---	---	---	--	---






	+		-		+		+		=
---	---	---	---	---	---	--	---	---	---

	+		-		-		+		=
---	---	---	---	---	---	--	---	---	---

	+		+		+		-		=
---	---	---	---	---	---	--	---	---	---

	+		-		-		+		=
---	---	---	---	---	---	--	---	---	---

	-		+		-		+		=
---	---	---	---	---	---	--	---	---	---

	+		+		+		-		=
---	---	---	---	---	---	--	---	---	---