



















































Naam: _____

Hoeveel is het plaatje waard?

| | | | | | | | | | |
|---|---|---|---|---|---|--|---|---|---|
|  |  |  |  |  |  |  |  |  |  |
| 5 | 10 | 4 | 6 | 2 | 9 | 8 | 3 | 15 | 7 |

Reken de som uit

| | | | | | | | | | |
|---|---|---|---|---|---|--|---|---|---|
|  | + |  | - |  | + |  | + |  | = |
|  | - |  | + |  | - |  | + |  | = |
|  | + |  | - |  | + |  | + |  | = |
|  | + |  | - |  | - |  | + |  | = |
|  | + |  | + |  | + |  | - |  | = |
|  | + |  | - |  | - |  | - |  | = |
|  | - |  | + |  | - |  | + |  | = |
|  | - |  | + |  | + |  | - |  | = |